



Pokoloruj (A)

W każdej parze działań pokoloruj obrazek przy tym działaniu, które daje większy wynik.




$$\begin{array}{r} 2 \ 3 \ 4 \\ + \quad 5 \ 2 \\ \hline \dots \ \dots \ \dots \end{array}$$

$$\begin{array}{r} 2 \ 6 \ 3 \\ + \quad 1 \ 3 \\ \hline \dots \ \dots \ \dots \end{array}$$



$$\begin{array}{r} 4 \ 7 \ 2 \\ + \quad 1 \ 6 \\ \hline \dots \ \dots \ \dots \end{array}$$

$$\begin{array}{r} 4 \ 5 \ 0 \\ + \quad 3 \ 9 \\ \hline \dots \ \dots \ \dots \end{array}$$



$$\begin{array}{r} 3 \ 2 \ 8 \\ + \quad 6 \ 4 \ 1 \\ \hline \dots \ \dots \ \dots \end{array}$$

$$\begin{array}{r} 1 \ 2 \ 5 \\ + \quad 8 \ 3 \ 4 \\ \hline \dots \ \dots \ \dots \end{array}$$



$$\begin{array}{r} 4 \ 6 \ 1 \\ + \quad 4 \ 2 \ 5 \\ \hline \dots \ \dots \ \dots \end{array}$$

$$\begin{array}{r} 4 \ 4 \ 6 \\ + \quad 3 \ 4 \ 0 \\ \hline \dots \ \dots \ \dots \end{array}$$

